

**LADY FLORENCE CONVENT SCHOOL  
SUMMER HOLIDAY HOME WORK  
SESSION -2022 -23  
CLASS-2**

# SUMMER VACATION

Summer is the time for watermelon, mango, popsicles, picnic, pool, lemonade, sunshine, cherries, road trips and sea shells.

Have a happy

**Summer Vacation!**

Stay safe & Enjoy!

**Holidays starts from:23<sup>rd</sup> May,2022**

**Holidays Ends on : 2<sup>nd</sup> July,2022**

**School reopens on:4<sup>th</sup> July,2022**

**Name: \_\_\_\_\_**

**“Open your heart & listen to the music of vivid sounds that touch your ears & nerves”**



**Be Reflective – Follow Them:**

**\*Instructions to be followed\***

**Complete your work with honesty & neatness.**

**Use a place with good light, low temperature & proper sitting to accomplish your task.**

**Use separate notebooks for each subject.**

**\*Always keep a dictionary near you\*.**

**Writing is important so complete a page daily in a separate note book. (both English & hindi)**

**Enrich yourself with new words & resources.**

**It's hot outside so inculcate laughter physical activities in your daily schedule.**

**Practice Mindfulness, calming yoga, simple breathing exercises & laughter therapies at home.**

**Make a \*Mirror friend\***

**Sing songs & \*practice humming\* for better vocals.**

**Sanitize your place & your things before using them.**

**Read a story to your younger brothers & sisters.**

**Learn one vocational skill in these holidays.**

**Try to talk in English with your parents, neighbours & friends.**

**Say a good night prayer with your parents.**

**Clean the work area after completing the activity.**

**Look at the clock and observe the changes in timings and try to read the time.**

**Keep God before everything & share your dreams with him.**

**Plant a tree and give water to it daily.**

**Put water and some grains for the birds outside.**

**Save water and electricity.**

**Segregate kitchen waste as dry and wet garbage.**

**\*Everyday remembers to tell them this one line- Thank you Mumma thank you papa for everything\*.**

**Remember your holiday homework is marked & consist of grades so do your best.**

**Submit the homework once the school reopens. Do the holiday homework in separate notebook or beautiful handmade folders.**

**\*Be healthy, joyful & knowledgeable!\***

**Important: Revise and practice all the work done class (in the notebooks, books, worksheets etc.) of all subject for the upcoming exams.**

**English**  
**Worksheet 1**



**QA.** Read the passage and answer the following question:  
Must have wondered many times how a rainbow appears in the sky after it has rained. Sunlight appears to be white in Colours because the light of the seven colours mix together to produce the white colours. These seven colours are: Violet ,Indigo,Blue ,Green,Yellow ,Orange , Red in the bands a rainbow, red is outermost colour and violet is the innermost colour in the band.

**Answer the following question.**

1. How many colours are there in the sunlight?

Ans. \_\_\_\_\_

2. Why does sunlight appear to be white in colour?

Ans. \_\_\_\_\_

3. Write any two

a) Nouns :- \_\_\_\_\_

b) Pronouns :- \_\_\_\_\_

4. Write the opposite of

a) heavy \_\_\_\_\_                      b) white \_\_\_\_\_

5. State True / False.

a) Rainbow has seven colours.     (    )

b) Rainbow can be seen in the sky after it rains.     (    )

**Q B. Replace the first letter with the given letter to form a new word.**

(a) Cable with letter T \_\_\_\_\_     (b) Name with letter G \_\_\_\_\_

(c) Bone with letter T \_\_\_\_\_     (d) Lane with letter C \_\_\_\_\_

**Q C. Read any English story book of your choice. Write the name of your story. Draw and colour any one character that you liked the most in that story.(A4 size Sheet)**

## Worksheet 2

**Q A. Read each group of words. If it is a complete sentence, Write 'Yes' on the line. If it is not a complete sentence, write 'ON' the line.**

1. Laura brought her lunch today. \_\_\_\_\_

2. Ate her lunch in the cafeteria. \_\_\_\_\_

3. Garrett and grant \_\_\_\_\_

4. Kimi forgot to close the door. \_\_\_\_\_

5. down the street. \_\_\_\_\_

6. the cloudy skies. \_\_\_\_\_

7. We saw a rainbow after the storm passed. \_\_\_\_\_

8. Fed the humming birds. \_\_\_\_\_

9. A butterfly landed on Jaysa's foot. \_\_\_\_\_

**Q B. Solve the following riddles:**

a) I have a trunk, but I am not an elephant. Who am I? \_\_\_\_\_

b) I make a whistling sound; I can carry a thousand people at a time. Who am I? \_\_\_\_\_

c) I have wings but I'm not a bird. I am small and colourful. I live in gardens and fields and forests. I used to be a caterpillar. Who am I? \_\_\_\_\_

d) I come in many colours and I am seen on your birthday you did better hold me tightly or else I may fly away. Who am I? \_\_\_\_\_

### Activity

Make a Decorative wall hanging of word chain. Start your chain with any word and continue it with the last letter of previous word like-wall-lamp-pot-toy and so on. Also draw or paste pictures.

**SUBJECT- E. V.S**

**ASSIGNMENT – 1**

**Choose the correct option:-**

Q1. What do we call our parent's parents?

- (a) Uncle      (b) cousin      (c) grandparents      (d) friend

Q2. A small family is also called \_\_\_\_\_ family.

- (a) Joint      (b) nuclear      (c) big      (d) small family

Q3. How many bones we have in our body?

- (a) 200      (b) 306      (c) 206      (d) 306

Q4. Name the organ which helps us to breathe?

- (a) Stomach      (b) heart      (c) brain      (d) lungs

Q5. What do we call a new born child?

- (a) Youth      (b) adult      (c) infant      (d) teenager

Q6. What name is given to Young one of hen?

- (a) Calf      (b) chick      (c) puppy      (d) kitten

Q7. Ayushi doesn't brush her teeth after eating sweets. She has \_\_\_\_\_.

- (a) Headache      (b) bodyache      (c) toothache      (d) stomachache

Q8. Name the tiny living things that we cannot see.

- (a) Germs      (b) insects      (c) dust      (d) animals

Q9. What do we say if we want something?

- (a) Sorry      (b) thank you      (c) please      (d) hello

Q10. What should we use while coughing or sneezing?

- (a) Handkerchief      (b) newspaper      (c) cloth      (d) polythene

**ASSIGNMENT – 2**

**Choose the correct option:-**

Q1. Every member of the family has a common \_\_\_\_\_.

- (a) Height      (b) work      (c) surname      (d) weight

Q2. Parents and children make a \_\_\_\_\_.

- (a) Field      (b) family      (c) home      (d) surname

Q3. How many muscles we have in our body?

- (a) 200      (b) 500      (c) more than 600      (d) 400

Q4. How our stomach does looks like?

- (a) Square      (b) pouch      (c) triangle      (d) cone

Q5. We should not talk with\_\_\_\_\_.

- (a) Parents      (b) sister      (c) strangers      (d) friends

Q6. We should eat \_\_\_\_\_food.

- (a) Junk      (b) stale      (c) healthy      (d) unhealthy

Q7. How many hours of sleep are important for our body?

- (a) 6 hours      (b) 8 hours      (c) 5 hours      (d) 10 hours

Q8. When you receive a gift from someone what should you say back to them?

- (a) Sorry      (b) please      (c) welcome      (d) thank you

Q9. Name the organ which helps you to think?

- (a) Heart      (b) brain      (c) kidney      (d) lungs


Q10. which of the following is the largest sense organ?

- (a) Skin      (b) eyes      (c) nose      (d) ears

### ACTIVITY TIME

1 Paste pictures of healthy and unhealthy food items in scrap book.

2 Match the food to its source:-



## SUBJECT-MATHS

### ASSIGNMENT-1

**Choose the correct option:-**

Q1. Place value of the digit '8' in 809 is \_\_\_\_\_.

- (a) 800      (b) 0      (c) 80      (d) 8

Q2. Even number just after 211 is \_\_\_\_\_.

- (a) 214      (b) 212      (c) 412      (d) 312

Q3. Sixty – three in figure is \_\_\_\_\_.

- (a) 603      (b) 633      (c) 63      (d) 366

Q4. Short form of  $300+20+8$  is \_\_\_\_\_.

- (a) 328      (b) 823      (c) 283      (d) 382

Q5. The greatest 3 digit number is \_\_\_\_\_.

- (a) 9999      (b) 999      (c) 900      (d) 99

Q6. The number comes between 299 and 301 is \_\_\_\_\_.

- (a) 298      (b) 302      (c) 300      (d) 330

Q7. Which number is greater than 799 \_\_\_\_\_.

- (a) 835      (b) 796      (c) 797      (d) 792

Q8. What is the face value of 2 in 3246 \_\_\_\_\_.

- (a) 2      (b) 20      (c) 200      (d) 0

Q9. Which digit is in the tens place in number 938 \_\_\_\_\_.

- (a) 3      (b) 8      (c) 9      (d) 30

Q10. Which number shows four hundred thirty-nine.

- (a) 449      (b) 439      (c) 409      (d) 493

### ASSIGNMENT-2

Q1. Ms. Smith has three children. Does she have an even or odd number of children?

- (a) Even      (b) odd

Q2. Which digit determines if the number is even or odd?

- (a) Ones place      (b) hundred place      (c) tens place      (d) all of these

Q3. What is the smallest two digit number?

(a) 13

(b) 11

(c) 19

(d) 10

Q4. What is the successor of the number 325?

(a) 326

(b) 324

(c) 300

(d) 330

Q5. Which of the following is not an even number?

(a) 226

(b) 332

(c) 557

(d) 500

Q6. Which one of the following is even

(a)  $3 \times 4$

(b)  $5 \times 7$

(c)  $1 \times 3$

(d)  $9 \times 5$

Q7. Count by two's and fill in the missing number

(a) 2,4,6,8,\_\_\_\_\_, \_\_\_\_\_, 14,16

Q8. Write the next four even numbers in the following

6,8,10,12,\_\_\_\_\_, \_\_\_\_\_, \_\_\_\_\_, \_\_\_\_\_, \_\_\_\_\_.

Q9. What is the place value of digit 7 in number 871?

(a) 7

(b) 70

(c) 700

(d) 78

Q10. Name the shape which can slide as well as roll.

(a) Sphere

(b) cone

(c) square

(d) cuboid

### ACTIVITY TIME

1 Make a list in your scrapbook of the shapes you find in your house. Look for cylinders, rectangular, cones and spheres.

2 Make a dice with the help of empty box.

3 Solve it.

#### I. Write the place values of the three digits for the given numbers.

1.  $\begin{array}{ccc} 4 & 1 & 5 \\ \downarrow & \downarrow & \downarrow \\ \square & \square & \square \end{array}$

2.  $\begin{array}{ccc} 2 & 6 & 1 \\ \downarrow & \downarrow & \downarrow \\ \square & \square & \square \end{array}$

3.  $\begin{array}{ccc} 2 & 6 & 0 \\ \downarrow & \downarrow & \downarrow \\ \square & \square & \square \end{array}$

4.  $\begin{array}{ccc} 4 & 4 & 4 \\ \downarrow & \downarrow & \downarrow \\ \square & \square & \square \end{array}$

5.  $\begin{array}{ccc} 4 & 0 & 6 \\ \downarrow & \downarrow & \downarrow \\ \square & \square & \square \end{array}$

6.  $\begin{array}{ccc} 2 & 3 & 5 \\ \downarrow & \downarrow & \downarrow \\ \square & \square & \square \end{array}$

#### II. Write the missing numbers.

7.  $215 = 200 + \square + 5$

8.  $352 = \square + 50 + 2$

9.  $230 = 200 + 30 + \square$

10.  $37 \square + 300 + 70 + 6$

11.  $\square 20 = 200 + 20 + 0$

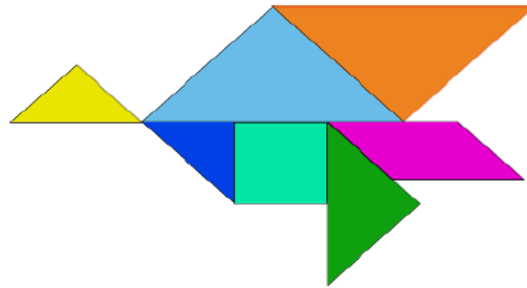
12.  $\square \square 5 = 200 + 30 + 5$





**TANGRAMS-A tangram is a puzzle made up of seven shapes that can be arranged to form many different designs. A tangram is made up of two big triangles, one medium triangle, two small triangles, one square and one parallelogram. All these shapes are obtained by cutting a square.**

**Example:**



**So, tickle your brain and make any two figures using tangram and paste them on any A4-size sheet.**

**Suggested YouTube link**

<https://www.youtube.com/watch?v=xbh1gkr0-Qc>

**SUBJECT- G.K.  
ASSIGNMENT**

Q1. Who was the first Indian American astronaut to go to space?

- (a) APJ Abdul kalam      (b) kalpana Chawla      (c) M. F. Hussain      (d) Dr B. R. Ambedkar

Q2. Which city is called the Pearl City?

- (a) Hyderabad      (b) chandigarh      (c) Delhi      (d) karnataka

Q3. Which is the first Indian city to get a road that is made out of steel waste?

- (a) Mumbai      (b) lucknow      (c) Delhi      (d) surat

Q4. Where was the summer Olympics 2020 held?

- (a) Delhi, India      (b) Tokyo, Japan      (c) London, England      (d) Washington DC, USA

Q5. Name the cartoon character who lives in the forest with wild animals?

- (a) Doremon      (b) Mowgli      (c) Dennis      (d) Garfield

Q6. The colourful and beautiful insect that moves from flower to flower?

- (a) Housefly      (b) mosquito      (c) honeybee      (d) butterfly

Q7. Name the festival which is celebrating in Punjab?

- (a) Lohri      (b) bihu      (c) pongal      (d) onam

Q8. Name the state in which statue of unity is situated?

- (a) Haryana      (b) Gujarat      (c) chandigarh      (d) lucknow

Q9. Name the bird which is brightly coloured and hunts fish with its long and sharp beak?

- (a) Flamingo                      (b) Kingfisher                      (c) parrot                                      (d) hummingbird

Q10. In which state is daal baati churma popular?

- (a) Assam                                      (b) Maharashtra                      (c) Rajasthan                                      (d) Andhra pradesh

**ACTIVITY TIME**

1 Write two things that you like about the state you live in.

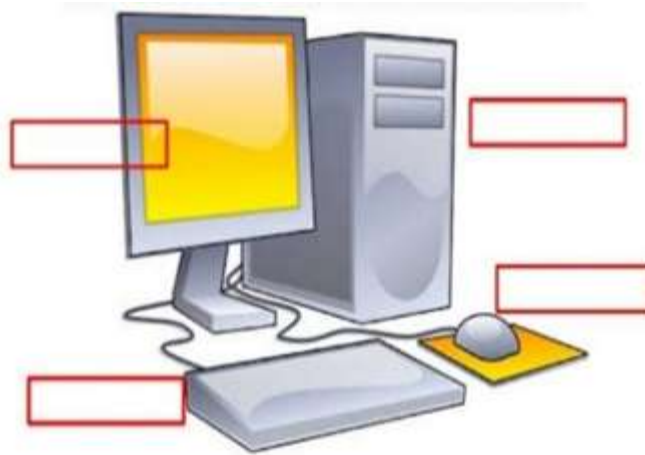
2 Draw a picture of plant, colour it and write the names of its different parts.

**Subject – Computer**

Q1. Look at the picture and match the following.

	•	•	 see
	•	•	 hear
	•	•	 type
	•	•	 store
	•	•	 move

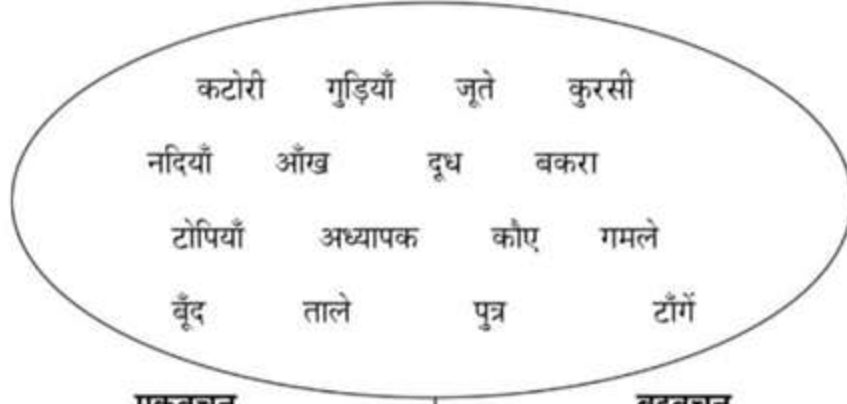
Q4. Write the names of the parts from the given option.



MONITOR      MOUSE      KEYBOARD      CPU

## हिन्दी

1. कोई दो हिन्दी कहानी पढ़कर उससे क्या शिक्षा मिलती है लिखिए ।
- 2 आ,इ,ई,उ,ऊ,ए,ऐ,ओ,औ की मात्राओं का शब्दकोश बनायें ।(कम-से-कम 5 शब्द)
- 3 नीचे दिए गए शब्दों को सही स्थान पर लिखो ।



<u>एकवचन</u>	<u>बहुवचन</u>
.....	.....
.....	.....
.....	.....
.....	.....
.....	.....
.....	.....
.....	.....
.....	.....
.....	.....

प्रतिदिन एक पृष्ठ सुलेख लिखो ।(रफ़ नोट बुक में )

### Activity of Moral Education

1. Paste picture of Good Habits on A-3 size sheet.
2. Make a Thankyou card for your Grandparents.

### Activity of Drawing

1. Make a Paper Toy.

Link -<https://youtu.be/l1bln6QiHwo>

2. Make a doll with Match -stick on A-4 size sheet.

Link -[https://youtu.be/9\\_L\\_czWSMog](https://youtu.be/9_L_czWSMog)

## Activity

Use your creativity to make different things with these seeds. You can use sketch pens, paints, glitters etc. to decorate. Dry the seeds of the fruits you have eaten by keeping them open in a plate for few days. Some ideas are given below for your reference.



Summers are here and for beating the heat of this scorching sun grab your mother's hand and make a dish of yummy fruit salad with all the fruits of your choice by following the given recipe:

**INGREDIENTS:** Finely chopped fruits of your choice like banana, pineapple, watermelon, mango, apples, grapes, pomegranate. 2 Teaspoon of lemon juice 1 Tablespoon crushed sugar  
A pinch of chat masala

**METHOD:** Place all the fruits in a bowl. Place the bananas, chopped apples, 1/2 of a red pomegranate, 1/2 of a watermelon, 1 mango, and 1/2 a cup of grapes together in a bowl. You can toss lightly to blend the flavours.

**ADD THE ADD – ONS:** In this bowl of your favourite flavours add sugar and lemon juice.

**GARNISH AND SERVE:** Garnish this fruit bowl with a pinch of chat masala and serve your yummy fruit salad to your family and enjoy it with them. Also, enjoy the smile on their face. Do not forget to click photographs.